

# Counting carrots!

How many carrots can you count on this page?

Count along with Honey  
by tapping each carrot as you go.



1



2



3



4



5



6



7



8



9



10



# Counting carrots!

Can you add up each row of carrots?

 $+ + =$ 

---

 $+ + + =$ 

---

 $+ =$ 

---

 $=$ 


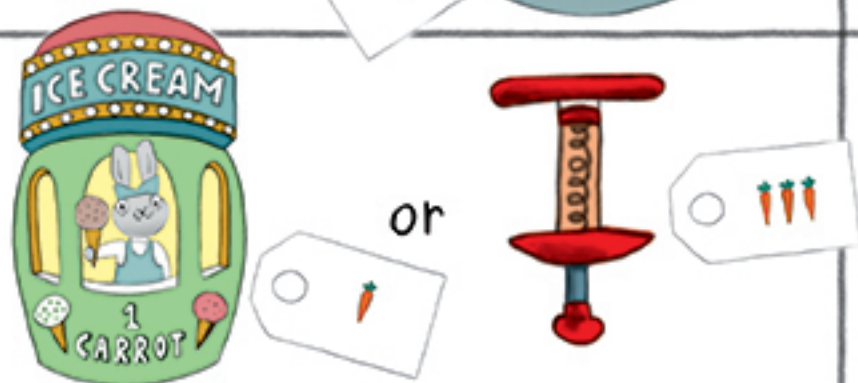
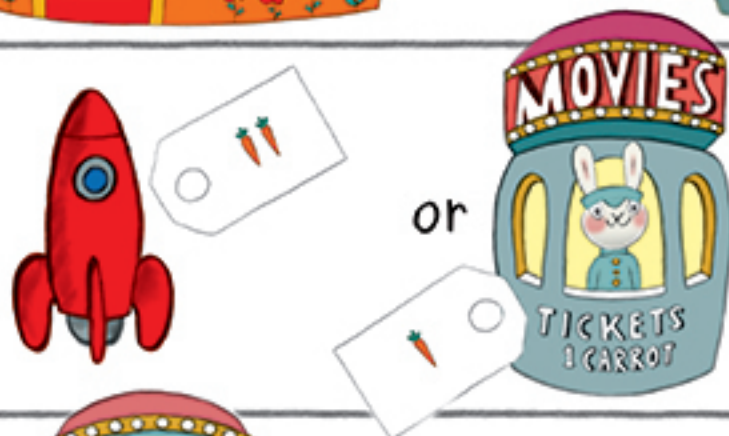

---

 $+ + + + =$

# Counting carrots!

Circle the more expensive thing

How many more carrots does it cost?



# Counting carrots!

How many carrots  
are in each row?  
Count them by  
tapping each carrot  
in each row  
and see if  
you get  
the same  
answer!



1



2



3



4



5



6



7



8



9



10

# Counting carrots!

Can you count the number of carrots in each row?

Tap each carrot in each row and write down

your answer at the end of each row.



1



8